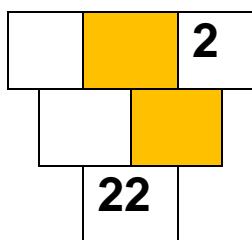
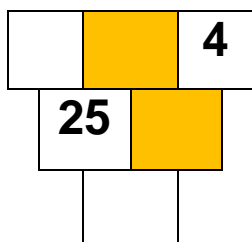


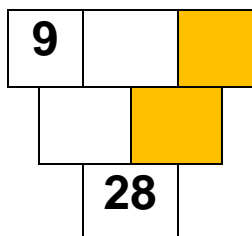
## PYRAMIDY 2



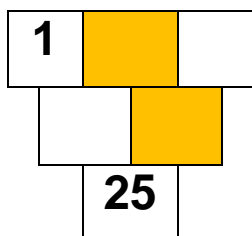
$$\square + \square = \square 12$$



$$\square + \square = \square 16$$



$$\square + \square = \square 19$$



$$\square + \square = \square 24$$